

## CISD Grade 3 Math Unit 11

Some questions (c) 2013 by TEKS Resource System.

1 About how much does the doll weigh?




- A 20 meters
- B 21 liters
- C 23 grams
- D 25 kilograms

2 Which one has the greatest mass?


F



G



H

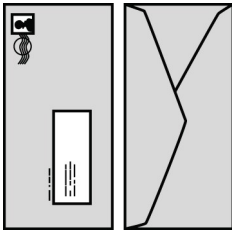


J



3 Which of the following is the heaviest?

A



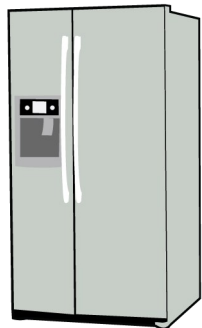
B



C



D



4 Which of the following is heavier than a pound?


F a candy bar

G a tack


H a student

J a pencil

- 5 Farmer Smith raises horses. He is known for having some of the most beautiful horses. Which unit would best measure the weight of a horse?



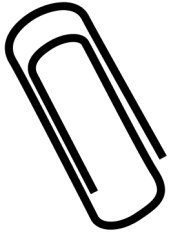
- A inches
  - B pounds
  - C gallons
  - D ounces
- 6 Susan was going to buy 2 bananas. Which one of the instruments below would she use to measure the weight of the bananas?




- F scale
- G ruler
- H yardstick
- J clock

7 Which of the following objects is heavier than 1 gram?


A




B



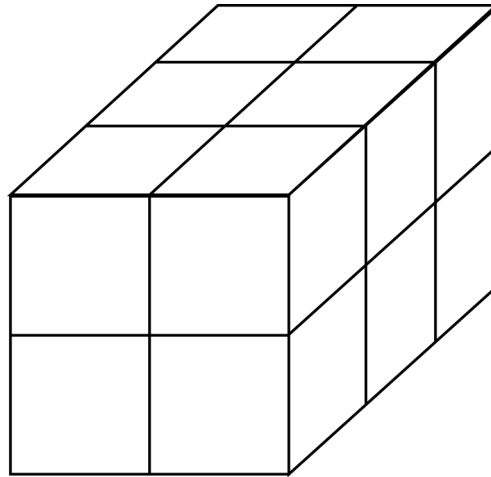
C



D



- 8 Look at the figure below.



How many cubic inches are equal to the volume of the figure? Each cube is equal to one inch.


- F 4 cubic inches
  - G 8 cubic inches
  - H 12 cubic inches
  - J 16 cubic inches
- 9 John drank a can of soda. Which measurement would be the BEST estimate of the amount of soda John drank?



- A 12 cups
- B 12 gallons
- C 12 ounces
- D 12 quarts



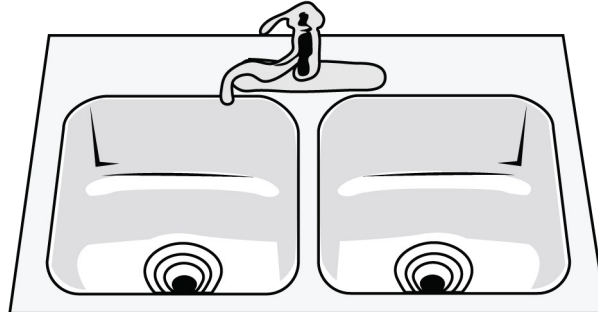
**10** Patrick wants to fill his 50-gallon aquarium with water.



Which measurement below would be the BEST to use and would require the least amount of work?

- F** a cup
- G** a pint
- H** a quart
- J** a pound

**11** Look at the picture below.

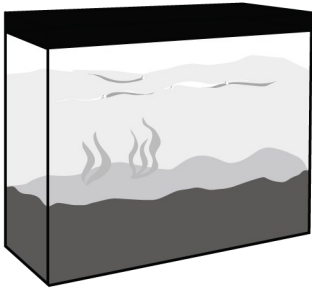


What statement is TRUE about the capacity of water the sinks contain?

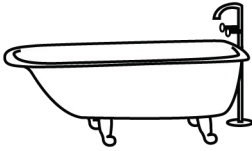
- A** The sinks contain more than a liter.
- B** The sinks contain less than a liter.
- C** The sinks contain the same as a liter.
- D** The sinks contain about 20 milliliters.

**12** Which one can contain about 2,000 gallons of water?

**F**



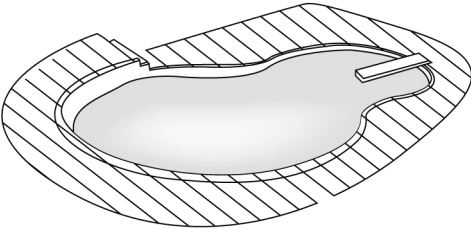
**G**



**H**



**J**



**13** Look at the object.






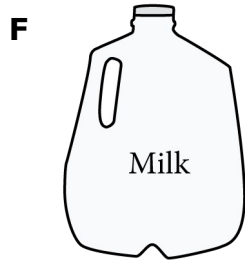
Which of the units below would be used to measure the amount of medicine the spoon holds?

- A** centimeter
- B** milliliter
- C** milligrams
- D** kiloliter

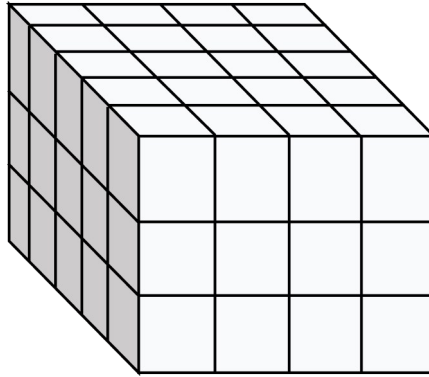
- 14** Mr. Sanchez drank four cups of coffee on Monday and four cups of coffee on Tuesday.



Which of the pictures below is the same amount of coffee Mr. Sanchez drank on both days?



**15** What is the volume of this rectangular prism in cubic inches?



Record your answer and fill in the bubbles on your answer document. Be sure to use the correct place value.

---

--	--