

CISD Grade 4 Social Studies Unit 09

Some questions (c) 2013 by TEKS Resource System.

1 Which of the following became the largest cattle ranch in Texas?

- A** Chisolm Ranch
- B** Loving Ranch
- C** King Ranch
- D** Glidden Ranch

2

- After the Civil War, I joined a group that tried to round up cattle across the state that had roamed free during the war.
- I recovered much of my cattle, but needed to get the herd to the North where they were paying top dollar for beef.
- With my partner Oliver Loving, I blazed a trail west across Texas and up to Colorado.
- The trail became famous.

Who am I?

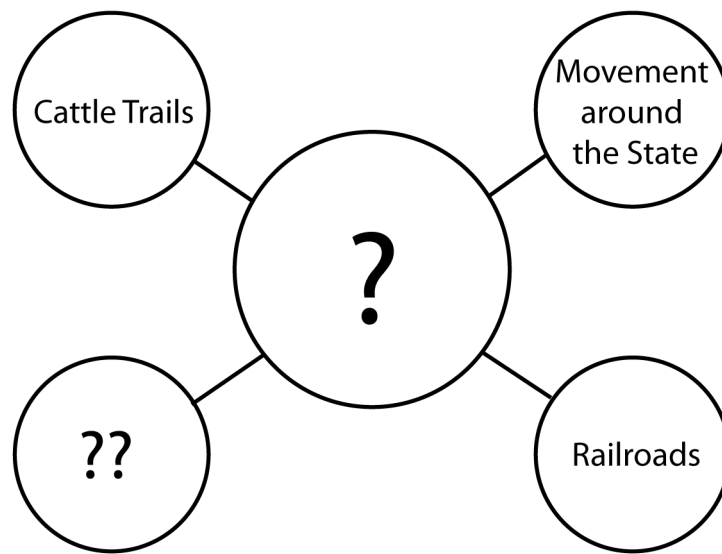
- F** Richard King
- G** Charles Goodnight
- H** Bose Ikard
- J** Lizzie Johnson Williams

3 Why did the cattle industry grow so much in Texas after the Civil War?

- A** The climate and wide open spaces of Texas made it a good place to raise cattle.
- B** There was a shortage of beef in the North.
- C** There were eventually railroads that made it faster to get cattle to market.
- D** All of the above are true.



- 4** The above photo was taken from a cattle drive. What conclusion can you draw about the trip to take cattle to market?
- F** There must have been great distances between towns because people had to carry supplies and cook outdoors.
 - G** People on the cattle drive were able to take luxury items on the trip in their wagons.
 - H** There were few hardships on the trail.
 - J** Cattle drivers were not able to meet their basic needs.



5 Choose the best word to complete the diagram where the ? is located:

- A** Revolution
- B** Migration
- C** Immigration
- D** Supply and Demand

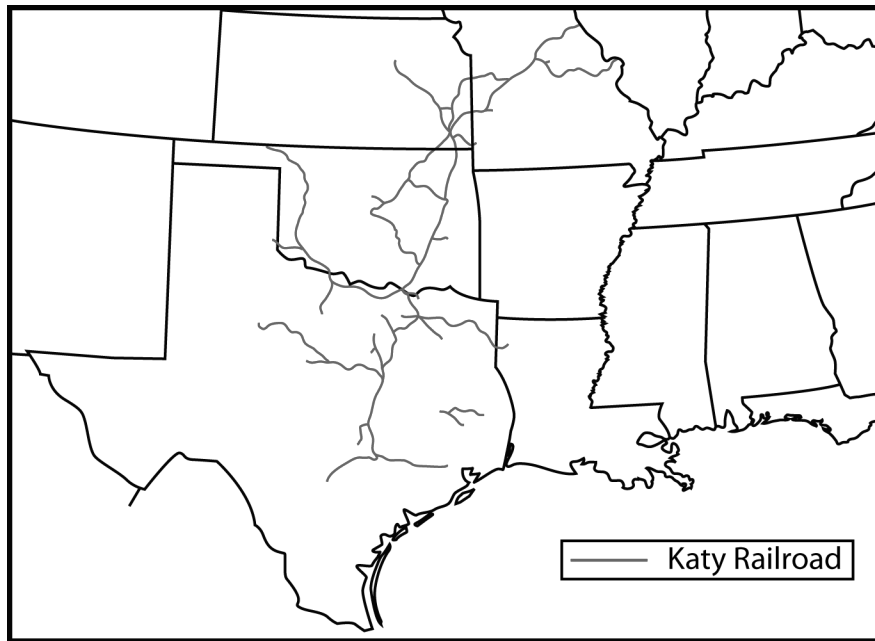
6 Choose the phrase that completes the diagram where ?? is located:

- F** Starting Over in New Towns and Communities
- G** Buying Extra Land for Your Ranch
- H** Hiring More Men for a Drive to the North
- J** Selling Farm Products at a Higher Price

7 How did railroads help the Texas economy?

- A** Goods could get to markets faster for sale.
- B** People had to stop working on farms.
- C** People could not pay goods the railroad brought.
- D** There were not as many jobs.

Use the map and your knowledge of social studies to answer the following questions.



8 Using your knowledge of the modern-day location of cities in Texas, which cities below grew up along the first railroad to come into Texas from the North?

- F** Corpus Christi
- G** Midland/Odessa
- H** Dallas/Ft. Worth
- J** El Paso

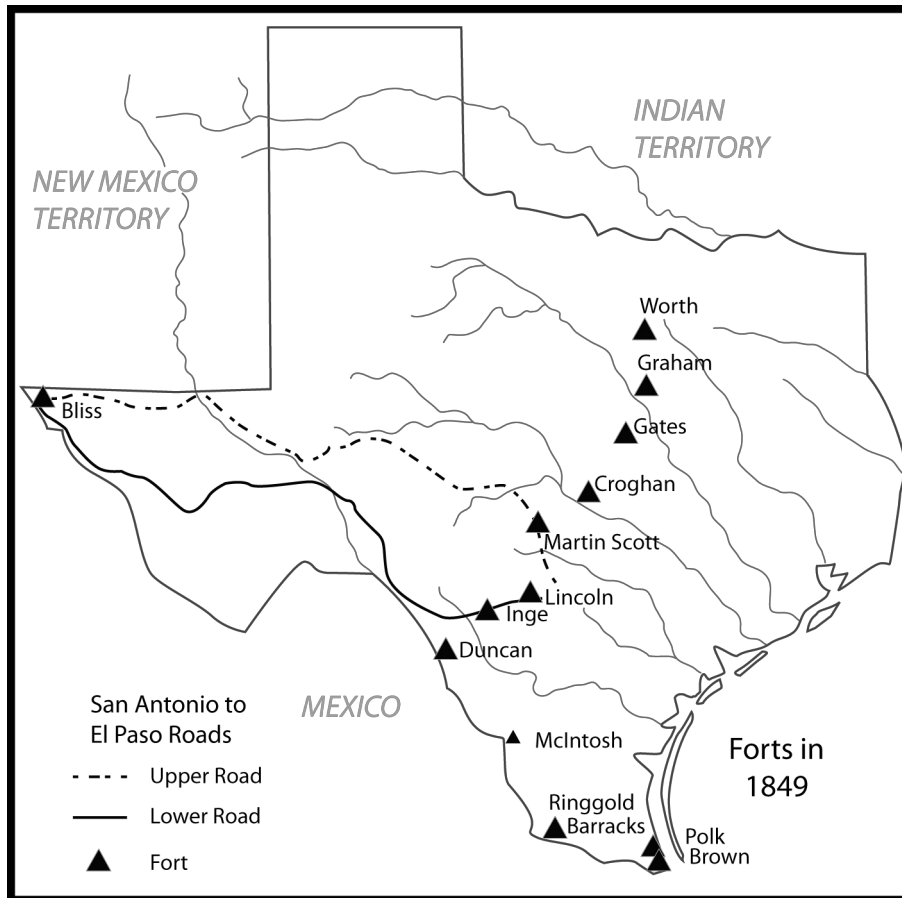
9 Transportation : railroad ::
Communication : _____

- A** cattle trail
- B** forts
- C** telegraph
- D** immigration

10 Which of the following is true based on the map?

- F** Cities died out along railroad lines.
- G** Cities grew larger or were started along railroad lines.
- H** Indian reservations were located along railroad lines.
- J** Small farms were located along railroad lines.

Use the map and your knowledge of social studies to answer the following questions.



- 11** Why were the forts built where they were?
- A** They were where the land was the cheapest.
 - B** They were where the fewest people needed protecting.
 - C** They were where Civil War forts had been.
 - D** They were the jumping off point to protect settlers going west against the Indians in buffalo territory.

- 12** The buffalo began to disappear from the area during this time. What was the cause?
- F** Railroads came in and buffalo were afraid and ran to other states.
 - G** Indians killed buffalo to meet their basic needs for food and shelter.
 - H** Buffalo caught a terrible virus that killed whole herds in Texas.
 - J** People killed buffalo by the hundreds for their hides to sell in cities.

